

**ATOMIC ENERGY CENTRAL SCHOOL NO-2 ,MUMBAI**  
**MCQ EXAMINATION (AUGUST 2023-24)**

Name - \_\_\_\_\_ Class/ sec IV - \_\_ Roll no- \_\_\_\_\_

---

- 1) Another word for **green field** is \_\_\_\_\_  
{ A. breeze      B. meet      C. meadow      D. sleep }
- 2) **Loveliest** is the superlative form of \_\_\_\_\_  
{ A. lovely      B. loved      C. love      D. lovey }
- 3) Suitable adjective for **wind** is \_\_\_\_\_  
{ A. curious      B. shining      C. sinking      D. blowing }
- 4) At which **attempt** did Nasruddin succeed in archery? \_\_\_\_\_  
{ A. first      B. second      C. third      D. fourth }
- 5) **Penalty corner** is used in \_\_\_\_\_ game.  
{ A. football      B. hockey      C. table tennis      D. cricket }
- 6) \_\_\_\_\_ is the correct spelling.  
{ A. raindops      B. raindrps      C. raindrops      D. raindrups }
- 7) \_\_\_\_\_ had pink eyes in the story.  
{ A. Alice      B. Nasruddin      C. the rabbit      D. the child }
- 8) Game in which eleven players **do not** play in one group is \_\_\_\_\_  
{ A. cricket      B. football      C. hockey      D. kabaddi }
- 9) \_\_\_\_\_ is the **odd - one** out of the following.  
{ A. breeze      B. cease      C. teach      D. freeze }
- 10) \_\_\_\_\_ was burning with curiosity.  
{ A. Nasruddin      B. the rabbit      C. children      D. Alice }
- 11) One word for happily and proudly is \_\_\_\_\_  
{ A. boast      B. target      C. triumphantly      D. chatting }

- 12) \_\_\_\_\_ **floats** on water.  
 { A. wood B. needle C. sand D. Steel rod }
- 13) Comparative form of **goodis** \_\_\_\_\_  
 { A. Better B. bestest C. best D. goodest }
- 14) What sort of boy is described in the poem? \_\_\_\_\_  
 { A. sad B. happy C. curious D. brave }
- 15) Antonym of **different** is \_\_\_\_\_.  
 { A. Unique B. similar C. unlike D. distinctive }
- 16) The garden Alice saw was \_\_\_\_\_.  
 { A. big B. small C. lovely D. dirty }
- 17) \_\_\_\_\_ **sinks** in water.  
 { A. plastic jug B. steel jug C. plastic mug D. plastic plate }
- 18) Which option can be unscrambled to make the word **skill**?  
 { A. liks B. slik C. liksl D. sliks }
- 19) Opposite of **late** is \_\_\_\_\_.  
 { A. later B. latest C. early D. exit }
- 20) Smooth, small, coloured stone balls that are used to play are \_\_\_\_\_.  
 { A. coins B. marble C. chess D. carrom }

प्रश्न 21. प्रश्न-अफसर की बात सुनकर पापा को समझ में आया कि सबसे पहले उन्हें क्या बनाना चाहिए।

(क) अधिकारी (ख) कामयाब

(ग) इंसान (घ) कोई नहीं

प्रश्न 22. शुरु में पापा क्या बनना चाहते थे ?

(क) पुलिस (ख) सिपाही

(ग) चोर (घ) चौकीदार

प्रश्न 23. नसीरुद्दीन के दोस्त का क्या नाम था ?

(क) करीम (ख) जमाल

(ग)अब्दुल (घ)रमेश

प्रश्न 24. घड़ों पानी पड़ना मुहावरे का क्या अर्थ होता है ?

(क) बहुत शर्मिन्दा होना (ख) नहाना

(ग) पानी भरना (घ) बारिशपड़ना

प्रश्न 25. हुसैन साहब से मिलने पर नसीरुद्दीन ने क्या कहा?

(क) यह अचकन मेरी है (ख) अचकन मैली है

(ग)अचकन फटी हुई है (घ) यह अचकन इनकी ही है

प्रश्न 26. जब पापा छोटे बच्चे थे पाठके लेखक कौन है ?

(क)शान्ति कुमारी जैन (ख) रेखाजैन

(ग )सुभद्रा सेन (घ) अलेक्सांद्र रस्किन

प्रश्न 27.नसीरुद्दीन और जमाल साहब कहां घूमने गये?

(क)मोहल्ले में (ख)बाज़ार में

(ग )पार्क (घ)शहर

प्रश्न 28. नसीरुद्दीन हुसैन साहब के लिए एक भड़कीली अचकन लाए वाक्य में विशेषण शब्द क्या है।

(क) नसीरुद्दीन (ख) हुसैन साहब

(ग ) भड़कीली (घ) अचकन

प्रश्न 29. वायुयान चालक बनने के बाद पापा ने..... बनने की सोची।

(क) अभिनेता (ख)चौकीदार

(ग ) रिक्शा चालक (घ)कप्तान

प्रश्न 30. अच्छा शब्द का विलोम शब्द लिखिए।

(क) नेक (ख) बुरा

(ग ) बढ़िया (घ) शैतान

प्रश्न 31. नया शब्द का विलोम शब्द लिखिए।

(क) पुराना

(ख) नवीन

(ग) नूतन

(घ) खराब

प्रश्न 32. जमाल साहब ने किसकी पोशाक पहनी थी?

(क) हुसैन साहब

(ख) भाई

(ग) नसीरुद्दीन

(घ) पड़ोसी

प्रश्न 33. निम्नलिखित शब्दों में से संज्ञा शब्द कौन-सा है।

(क) नाचना

(ख) आपका

(ग) हुसैन साहब

(घ) लिखना

प्रश्न 34. जमाल साहब ने घूमने से क्यों मना कर दिया?

(क) कपड़े मामूली थे

(ख) तबीयत ठीक नहीं थी

(ग) रिश्तेदार आए थे

(घ) घूमना पसंद नहीं था

प्रश्न 35. अंत में पापा ने क्या बनने का सोचा ?

(क) चौकीदार

(ख) फ़ौजी

(ग) इंसान

(घ) मजदूर

प्रश्न 36. शहर के सो जाने पर कौन जागता है।

(क) दुकानदार

(ख) चौकीदार

(ग) वफादार

(घ) मजदूर

प्रश्न 37. पापा छोटे बच्चों को क्या देना चाहते थे?

(क) कपड़े

(ख) खिलौने

(ग) किताबें

(घ) आइसक्रीम

प्रश्न 38. पापा के छोटे भाई को.....कहते हैं?

(क) मामा

(ख) चाचा

(ग) ताऊजी

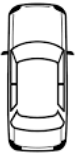
(घ) भाई

प्रश्न 39. पोशाक का अर्थ क्या होता है?

- (क) शक करना (ख) आभूषण  
(ग) कपड़े (घ) गहने

प्रश्न 40 नसीरुद्दीन अपने दोस्त.....से मिले।

- (क) हुसैन साहब (ख) ज़लाल साहब  
(ग) जमाल साहब (घ) लाल साहब



41) This is the \_\_\_\_\_ view of the car.

- A) side B) top  
C) front D) closed

42) The face of the clock is divided into 1 to \_\_\_\_\_ .

- A) 6 B) 8  
C) 12 D) 24

43)  $\frac{3}{4}$  hour = \_\_\_\_\_ minutes

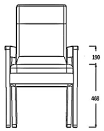
- A) 45 B) 60  
C) 30 D) 120

44) 1 year = \_\_\_\_\_ months

- A) 6 B) 24  
C) 10 D) 12

45) July has \_\_\_\_\_ days

- A) 30 B) 31  
C) 28 D) 29



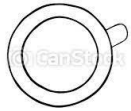
46) This is the \_\_\_\_\_ view of the chair.

- A) side B) top  
C) front D) closed



47) This is the \_\_\_\_\_ view of the table.

- A) side
- B) top
- C) front
- D) closed



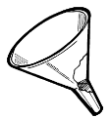
48) This is the \_\_\_\_\_ view of the cup.

- A) side
- B) top
- C) front
- D) closed

49) This is the \_\_\_\_\_ view of a shoe.



- A) side
- B) top
- C) front
- D) closed



50) This is the \_\_\_\_\_ view of a funnel.

- A) side
- B) top
- C) front
- D) closed

51) It takes \_\_\_\_\_ hour for the hour hand to move from one number to the next number.

- A) 2
- B) 1
- C) 3
- D) 4

52) The minute hand started at 2. It takes \_\_\_\_\_ minutes to come back to 2 again.

- A) 30
- B) 60
- C) 90
- D) 120

53) It takes \_\_\_\_\_ minutes for the minute hand to move from 4:35 to 4:55

- A) 20
- B) 10
- C) 15
- D) 25

54) It takes \_\_\_\_\_ minutes for the minute hand to move from 7:05 to 7:45

- A) 30                      B) 35  
C) 40                      D) 45

55) Where will the hands be : 20 minutes after 8 o' clock?

- A) 6:20                      B) 7:20  
C) 9:20                      D) 8:20

56) 4:00 in the afternoon is written in the 24 hour clock time as \_\_\_\_\_ hours.

- A) 04:00                      B) 20:00  
C) 16:00                      D) 15:00

57) 15 July 2018 is written in numbers as

- A) 15 / 7 / 18                      B) 15 / 6 / 18  
C) 15 / 8 / 18                      D) 18 / 7 / 15

58) 27 December 2009 is written in numbers as

- A) 27 / 10 / 09                      B) 27 / 12 / 09  
C) 27 / 12 / 20                      D) 27 / 11 / 09

59) Write which this date stands for – 14 / 10 / 2011

- A) 14 September 2011      B) 14 November 2011      C) 14 August 2011      D) 14 October 2011

60) The number of days from **1 / 5 / 2017 to 29 / 6 / 2017** is \_\_\_\_\_ days.

- A) 60                      B) 62                      C) 64                      D) 63

**Q61) We need to buy tickets to enter in a \_\_\_\_\_ .**

- A) House                      B) Office      C) Museum                      D) Class room

**Q62) The following information is not provided in a railway ticket.**

- A) Train Number                      B) Date of Birth of passengers

- C) Age of passenger                      D) Fare

**Q63) Omana left Ahmedabad on \_\_\_\_\_.**

- A) 16<sup>th</sup> May                      B) 17<sup>th</sup> May                      C) 18<sup>th</sup> May                      D) 30<sup>th</sup> May

**Q 64) Omana's \_\_\_\_\_ bought ticket for the bus.**

- A) papa                      B) amma                      C) Valiyamma                      D) Uncle

**Q65) Omana's family bought \_\_\_\_\_ from Udipi station.**

- A) Dosa                      B) Tea                      C) Idli-vada                      D) Samosa

**Q66) Language spoken in Andhra Pradesh is \_\_\_\_\_.**

- A) Malayalam                      B) Telugu                      C) Marathi                      D) Andhra

**Q67) Omana's train reached at \_\_\_\_\_ early in the morning on 17<sup>th</sup> may.**

- A) Udipi                      B) Madgaon                      C) Valsad                      D) Kottayam

**Q68) \_\_\_\_\_ tree was the most common tree that grow in Amrita's village.**

- A) Neem                      B) Khejadi                      C) Keekar                      D) Banyan

**Q69) Number of birds has reduced due to \_\_\_\_\_ .**

- A) Pollution    B) Plantation    C) Cleanliness    D) Green revolution

**Q70) RTE - act \_\_\_\_\_ provides free and compulsory education to each child of 6 to 14 years of age.**

- A) 2005    B) 2006    C) 2008    D) 2009

**Q71) Look at the following columns and select the correct match.**

- 1) Udipi                      a)Gujarat  
2) Valsad                    b) Kerala  
3) Kozhikode                c) Karnataka

- A) 1—b, 2—a, 3—c                      B) 1—a, 2---b, 3---c  
C) 1---c , 2—a, 3---b                    D) 1—c, 2—b, 3—a

**Q72) Which food item is not from Amma’s tiffin box?**

- A) Dhokla chutney    B) Lemon rice    C) Mithai    D) Banana

**Q73) Which among the following is not the reason for air pollution?**

- A) Deforestation                      B) Smoke from factories  
B) More number of vehicles            D) Tree Plantation

**Q74) At the \_\_\_\_\_ everyone is waiting for the train to stop.**

- A) Level Crossing                      B) Bus stop  
C) Air Port                              D) Traffic signal

**Q75) Anita belongs to the state of \_\_\_\_\_.**

- A) Uttar Pradesh    B) Bihar    C) Haryana    D) Goa

**Q76) Name the bees found in a bee hive?**

- A) Male bee    B) Queen bee    C) Worker bee    D) All

**Q77) How many bridges are there between Goa and Kerala?**

- A) 1000    B) 2000    C) 3000    D) 4000

**Q78) Which of the following is not a public transport vehicle ?**

- A) Train    B) Bus    C) Cycle    D) None of these

**Q79) Amrita would say her special tree as \_\_\_\_\_.**

- A) Mother    B) Father    C) Brother    D) Friend

**Q 80 ) Why did Omana write about the journey in ‘Omana’s diary’ ?**

- A. So that Radha could read it and know more about their journey  
B. For Radha’s amma  
C. To tease Radha  
D. None of these



